

Unit - 10

Money

Notes and coins used in current scenario -



₹ 1



₹



₹



₹



₹



₹



Name _____ Class _____

Section / Roll No. _____ Date _____



₹



₹








₹

Match the given set of coins of column A with same value in column B

Column 'A'

Column 'B'

- (1) 
- (2) 
- (3) 
- (4) 
- (5) 



❖ Count how much money -

(a)  +  +  = ₹ 8

(b)  +  +  = ₹

(c)  +  = ₹

(d)  +  +  +  = ₹

(e)  +  = ₹

(f)  +  +  = ₹

(g)  +  +  = ₹

(h)  +  = ₹



Name _____ Class _____
Section / Roll No. _____ Date _____

Changing of Notes

❖ Using notes and coins given below make the combination of equal value.



=



=



=



=

