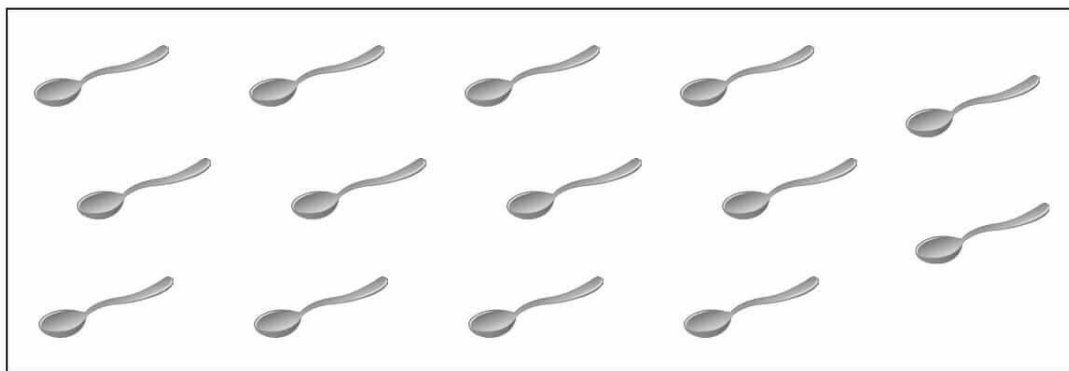

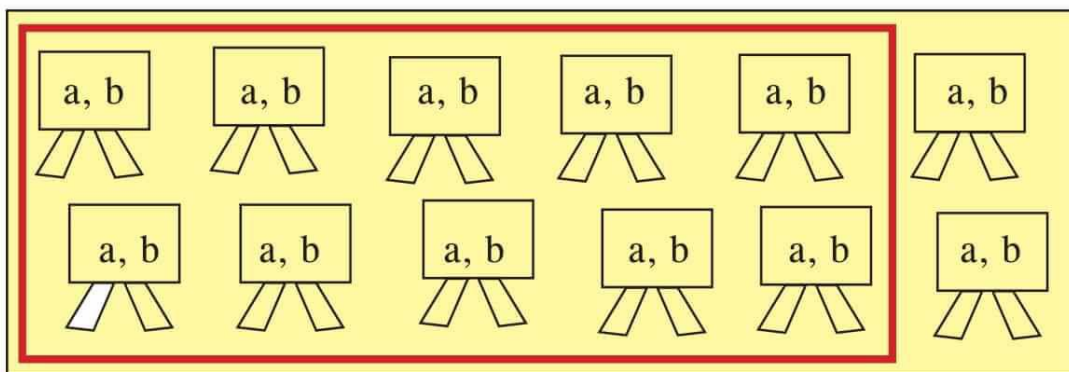


Unit - 5

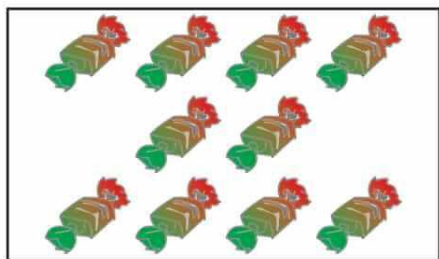
Numbers from Ten to Twenty

Make group of ten



Name _____ Class _____
Section / Roll No. _____ Date _____

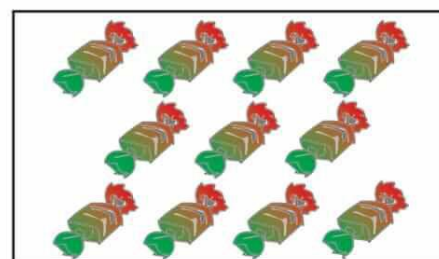
Count, add and write numbers in the box



+



=



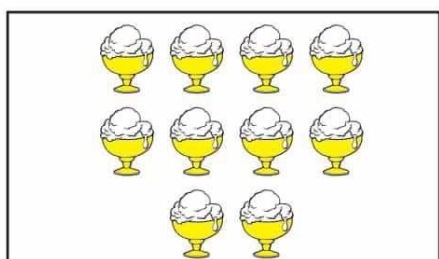
10

+


1

=

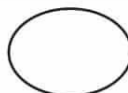
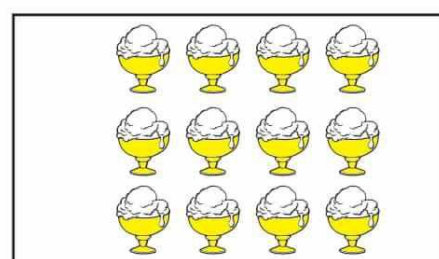
11



+



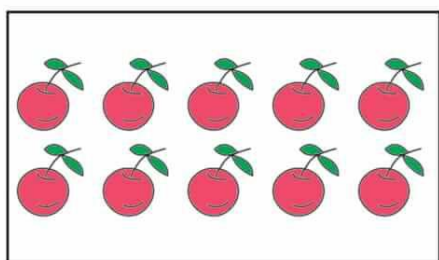
=



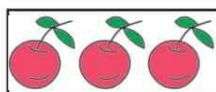
+



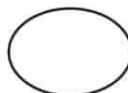
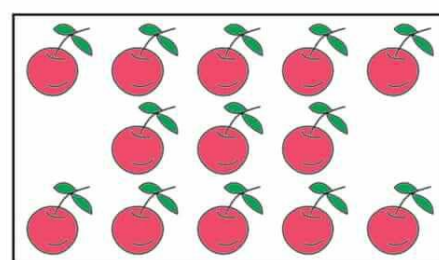
=



+



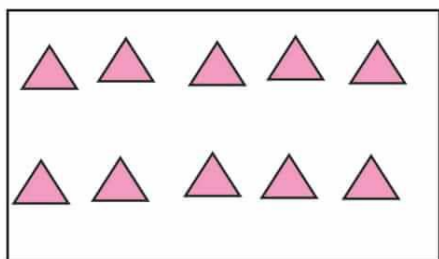
=



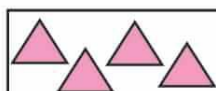
+



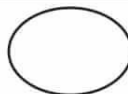
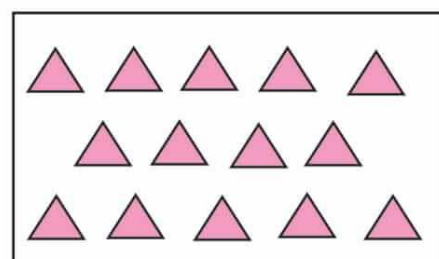
=



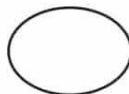
+



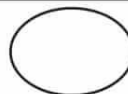
=

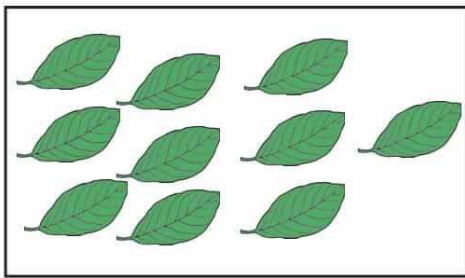


+

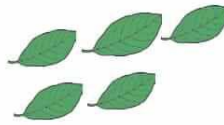


=

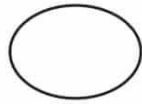
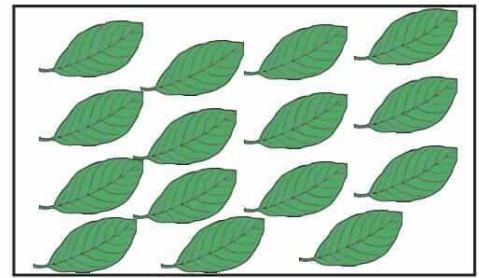




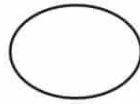
+



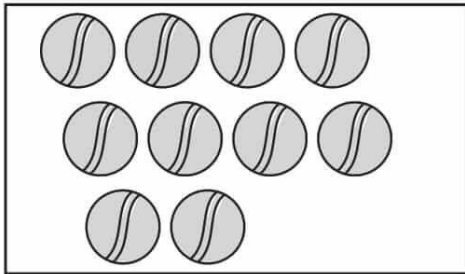
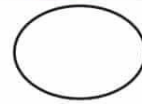
=




+



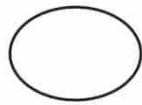
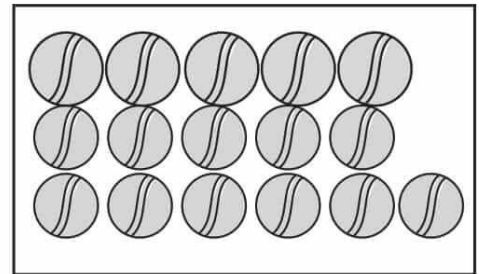
=



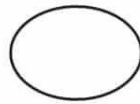
+



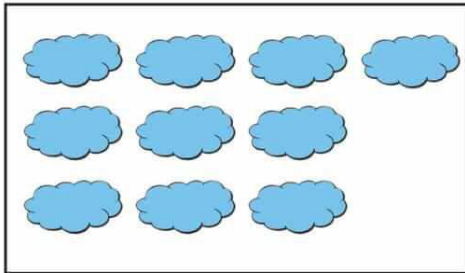
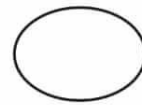
=




+



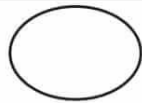
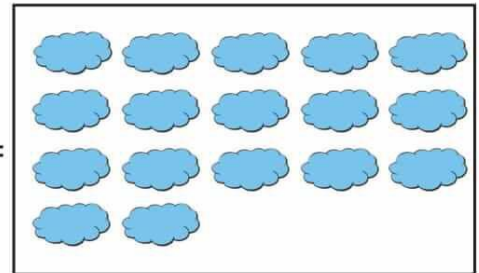
=



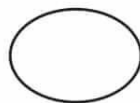
+



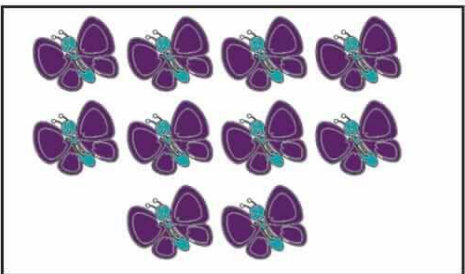
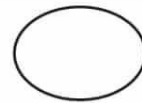
=




+



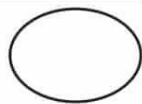

=



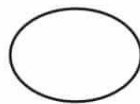
+



=




+




=




Name _____ Class _____
Section / Roll No. _____ Date _____



+

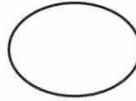


=

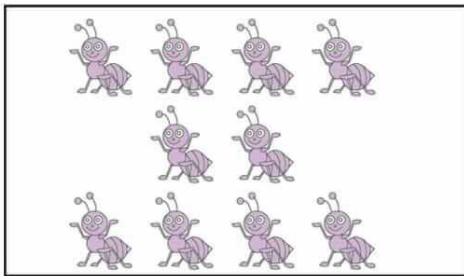
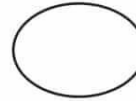


10


+



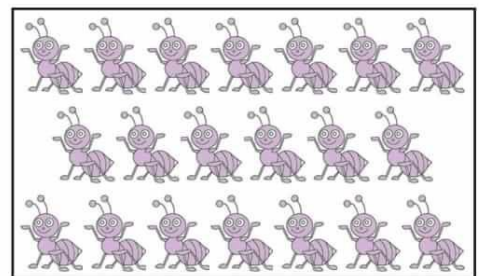
=



+

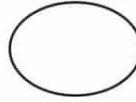


=



10

+






=



✦ Write the smallest number in the blank balloon.

(a)   

(b)   

(c)   

(d)   

(e)   



Name _____ Class _____
Section / Roll No. _____ Date _____

❖ Encircle the smaller number.

(a)

14	16
----	----

(d)

15	17
----	----

(b)

13	10
----	----

(e)

18	16
----	----

(c)


11	15
----	----

(f)


15	17
----	----

❖ Write the biggest number in the blank balloon.


(a)




(b)














(c)



(d)




✦ Practice of writing the number from 10 to 20.

10	11	12	13	14	15	16	17	18	19	20
										



Name _____ Class _____
 Section / Roll No. _____ Date _____

❖ Fill the missing numbers.



❖ What comes before -

_____	11	_____	14
_____	20	_____	16
_____	15	_____	12
_____	12	_____	19





What comes after -

10	_____	13	_____
18	_____	11	_____
14	_____	15	_____
19	_____	12	_____



What comes before and after -

(a) _____  _____

(b) _____  _____

(c) _____  _____

(d) _____  _____

(e) _____  _____



Name _____ Class _____
Section / Roll No. _____ Date _____

✦ What comes between the given numbers.

15 17

11 13

10 12

17 19

16 18




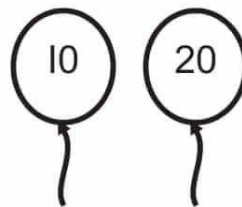

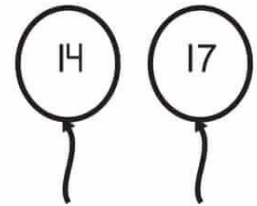


14 16

13 15

18 20

12 14

✦ Colour the balloon which has bigger number.



Add

(a) $3 + 8 = \square$

(b) $5 + 7 = \square$

(c) $9 + 8 = \square$

(d) $10 + 5 = \square$

(e) $12 + 7 = \square$

(f) $9 + 6 = \square$

(g) $3 + 13 = \square$

(h) $7 + 8 = \square$


(i) $14 + 2 = \square$

(j) $19 + 1 = \square$




Name _____ Class _____
Section / Roll No. _____ Date _____

Subtract

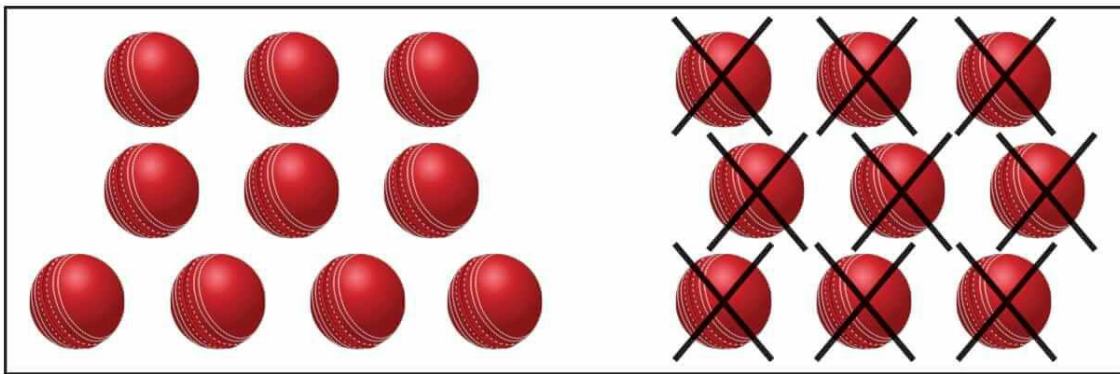


$$16 - 4 = 12$$

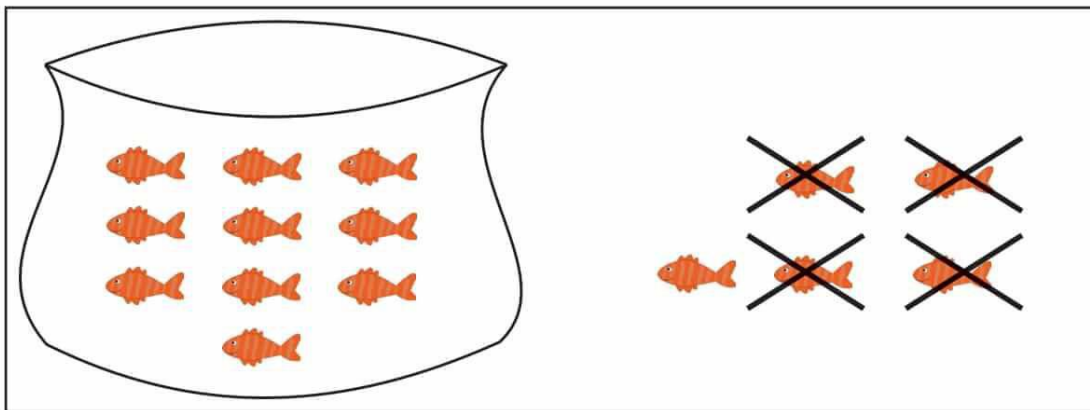


$$14 - 3 = \boxed{}$$






$$19 - 9 =$$



$$15 - 4 =$$



$$18 - 4 =$$



Name _____ Class _____
Section / Roll No. _____ Date _____

Assessment sheet

❖ Complete the table.

1			4	
	7			10
		13		
16			19	

❖ Add

(1) $14 + 1 =$

(2) $15 + 2 =$

(3) $2 + 17 =$

(4) $5 + 14 =$

(5) $12 + 5 =$

(6) $10 + 9 =$



Do and Learn

- 1) Sunita had three friends. Two more friends joined her. Now Sunita has _____ friends.

$$\boxed{3} \text{ friends} + \boxed{2} \text{ friends} = \boxed{} \text{ friends}$$

- 2) A school had 4 teachers. 3 new teachers joined the school. The school has _____ teachers now.

$$\boxed{} \text{ Teachers} + \boxed{} \text{ Teachers} = \boxed{} \text{ Teachers}$$

- 3) Wahida had 4 pencils. She got a packet of 10 pencils on her birthday. Wahida has _____ pencils now.

$$\boxed{} \text{ Pencils} + \boxed{} \text{ Pencils} = \boxed{} \text{ Pencils}$$

- 4) Mohani had 13 oranges. She ate 3 oranges. She has left with _____ oranges now.

$$\boxed{} \text{ oranges} + \boxed{} \text{ oranges} = \boxed{} \text{ oranges}$$



5) 7 glasses broken out of 18 glasses. Now _____ glasses were left.

$$\boxed{} \text{ glasses} + \boxed{} \text{ glasses} = \boxed{} \text{ glasses}$$

6) Anam has 15 toys. She lost 3 toys. Now she was left with _____ toys.

$$\boxed{} \text{ toys} + \boxed{} \text{ toys} = \boxed{} \text{ toys}$$

7) Arhaan had 19 toffees. Out of them 8 toffees fell on the ground. Now he has _____ toffees.

$$\boxed{} \text{ toffees} + \boxed{} \text{ toffees} = \boxed{} \text{ toffees}$$

