

Adding two

Add and write the sum in the box.

$$\begin{array}{rcl} 1 & + & 2 = \boxed{} \\ 2 & + & 2 = \boxed{} \\ 3 & + & 2 = \boxed{} \\ 4 & + & 2 = \boxed{} \\ 5 & + & 2 = \boxed{} \\ 6 & + & 2 = \boxed{} \\ 7 & + & 2 = \boxed{} \\ 8 & + & 2 = \boxed{} \\ 9 & + & 2 = \boxed{} \\ 10 & + & 2 = \boxed{} \end{array}$$

$$\begin{array}{rcl} 2 & + & 1 = \boxed{} \\ 2 & + & 2 = \boxed{} \\ 2 & + & 3 = \boxed{} \\ 2 & + & 4 = \boxed{} \\ 2 & + & 5 = \boxed{} \\ 2 & + & 6 = \boxed{} \\ 2 & + & 7 = \boxed{} \\ 2 & + & 8 = \boxed{} \\ 2 & + & 9 = \boxed{} \\ 2 & + & 10 = \boxed{} \end{array}$$

Adding three

Add and write the sum in the box.

$$\begin{array}{rcl} 1 & + & 3 = \boxed{} \\ 2 & + & 3 = \boxed{} \\ 3 & + & 3 = \boxed{} \\ 4 & + & 3 = \boxed{} \\ 5 & + & 3 = \boxed{} \\ 6 & + & 3 = \boxed{} \\ 7 & + & 3 = \boxed{} \\ 8 & + & 3 = \boxed{} \\ 9 & + & 3 = \boxed{} \\ 10 & + & 3 = \boxed{} \end{array}$$

$$\begin{array}{rcl} 3 & + & 1 = \boxed{} \\ 3 & + & 2 = \boxed{} \\ 3 & + & 3 = \boxed{} \\ 3 & + & 4 = \boxed{} \\ 3 & + & 5 = \boxed{} \\ 3 & + & 6 = \boxed{} \\ 3 & + & 7 = \boxed{} \\ 3 & + & 8 = \boxed{} \\ 3 & + & 9 = \boxed{} \\ 3 & + & 10 = \boxed{} \end{array}$$

Adding four

Add and write the sum in the box.

$1 + 4 = \boxed{}$

$2 + 4 = \boxed{}$

$3 + 4 = \boxed{}$

$4 + 4 = \boxed{}$

$5 + 4 = \boxed{}$

$6 + 4 = \boxed{}$

$7 + 4 = \boxed{}$

$8 + 4 = \boxed{}$

$9 + 4 = \boxed{}$

$10 + 4 = \boxed{}$

$4 + 1 = \boxed{}$

$4 + 2 = \boxed{}$

$4 + 3 = \boxed{}$

$4 + 4 = \boxed{}$

$4 + 5 = \boxed{}$

$4 + 6 = \boxed{}$

$4 + 7 = \boxed{}$



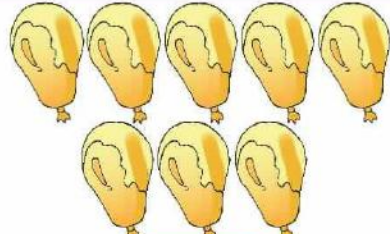
$4 + 8 = \boxed{}$




$4 + 9 = \boxed{}$




$4 + 10 = \boxed{}$




Practice Time

Count the objects in each group and write in the box.




	+		=	
<input type="text" value="3"/>	+	<input type="text" value="5"/>	=	<input type="text" value="8"/>

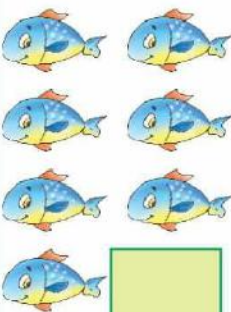

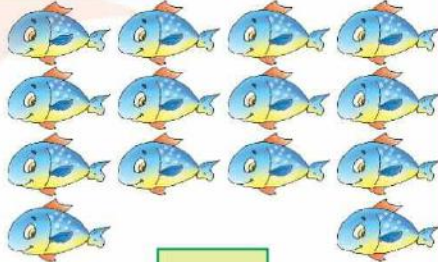
	+		=	
<input type="text"/>	+	<input type="text"/>	=	<input type="text"/>

	+		=	
<input type="text"/>	+	<input type="text"/>	=	<input type="text"/>

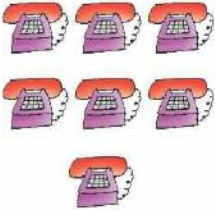
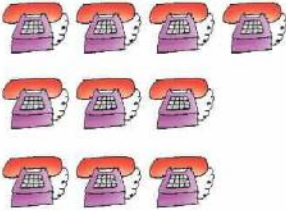
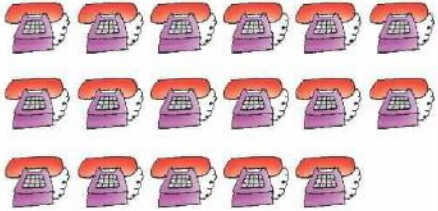
	+		=	
<input type="text"/>	+	<input type="text"/>	=	<input type="text"/>

Count the objects in each group and write in the box.

	+		=	
<input type="text"/>	+	<input type="text"/>		<input type="text"/>

	+		=	
<input type="text"/>	+	<input type="text"/>		<input type="text"/>

	+		=	
<input type="text"/>	+	<input type="text"/>		<input type="text"/>

	+		=	
<input type="text"/>	+	<input type="text"/>		<input type="text"/>

Adding five

Add and write the sum in the box.

$1 + 5 = \boxed{}$

$2 + 5 = \boxed{}$

$3 + 5 = \boxed{}$

$4 + 5 = \boxed{}$

$5 + 5 = \boxed{}$

$6 + 5 = \boxed{}$

$7 + 5 = \boxed{}$

$8 + 5 = \boxed{}$

$9 + 5 = \boxed{}$

$10 + 5 = \boxed{}$

$5 + 1 = \boxed{}$

$5 + 2 = \boxed{}$

$5 + 3 = \boxed{}$

$5 + 4 = \boxed{}$

$5 + 5 = \boxed{}$

$5 + 6 = \boxed{}$

$5 + 7 = \boxed{}$

$5 + 8 = \boxed{}$

$5 + 9 = \boxed{}$

$5 + 10 = \boxed{}$

Adding six

Add and write the sum in the box.

$$\begin{array}{rcl} 1 & + & 6 = \boxed{} \\ 2 & + & 6 = \boxed{} \\ 3 & + & 6 = \boxed{} \\ 4 & + & 6 = \boxed{} \\ 5 & + & 6 = \boxed{} \\ 6 & + & 6 = \boxed{} \\ 7 & + & 6 = \boxed{} \\ 8 & + & 6 = \boxed{} \\ 9 & + & 6 = \boxed{} \\ 10 & + & 6 = \boxed{} \end{array}$$

$$\begin{array}{rcl} 6 & + & 1 = \boxed{} \\ 6 & + & 2 = \boxed{} \\ 6 & + & 3 = \boxed{} \\ 6 & + & 4 = \boxed{} \\ 6 & + & 5 = \boxed{} \\ 6 & + & 6 = \boxed{} \\ 6 & + & 7 = \boxed{} \\ 6 & + & 8 = \boxed{} \\ 6 & + & 9 = \boxed{} \\ 6 & + & 10 = \boxed{} \end{array}$$

Adding seven

Add and write the sum in the box.

$1 + 7 = \boxed{}$

$2 + 7 = \boxed{}$

$3 + 7 = \boxed{}$

$4 + 7 = \boxed{}$

$5 + 7 = \boxed{}$

$6 + 7 = \boxed{}$

$7 + 7 = \boxed{}$

$8 + 7 = \boxed{}$

$9 + 7 = \boxed{}$

$10 + 7 = \boxed{}$

$7 + 1 = \boxed{}$

$7 + 2 = \boxed{}$

$7 + 3 = \boxed{}$

$7 + 4 = \boxed{}$

$7 + 5 = \boxed{}$

$7 + 6 = \boxed{}$

$7 + 7 = \boxed{}$

$7 + 8 = \boxed{}$

$7 + 9 = \boxed{}$

$7 + 10 = \boxed{}$

Adding eight

Add and write the sum in the box.

$$\begin{array}{rcl} 1 & + & 8 = \boxed{} \\ 2 & + & 8 = \boxed{} \\ 3 & + & 8 = \boxed{} \\ 4 & + & 8 = \boxed{} \\ 5 & + & 8 = \boxed{} \\ 6 & + & 8 = \boxed{} \\ 7 & + & 8 = \boxed{} \\ 8 & + & 8 = \boxed{} \\ 9 & + & 8 = \boxed{} \\ 10 & + & 8 = \boxed{} \end{array}$$

$$\begin{array}{rcl} 8 & + & 1 = \boxed{} \\ 8 & + & 2 = \boxed{} \\ 8 & + & 3 = \boxed{} \\ 8 & + & 4 = \boxed{} \\ 8 & + & 5 = \boxed{} \\ 8 & + & 6 = \boxed{} \\ 8 & + & 7 = \boxed{} \\ 8 & + & 8 = \boxed{} \\ 8 & + & 9 = \boxed{} \\ 8 & + & 10 = \boxed{} \end{array}$$

Adding nine

Add and write the sum in the box.

$1 + 9 = \boxed{}$

$2 + 9 = \boxed{}$

$3 + 9 = \boxed{}$

$4 + 9 = \boxed{}$

$5 + 9 = \boxed{}$

$6 + 9 = \boxed{}$

$7 + 9 = \boxed{}$

$8 + 9 = \boxed{}$

$9 + 9 = \boxed{}$

$10 + 9 = \boxed{}$

$9 + 1 = \boxed{}$

$9 + 2 = \boxed{}$

$9 + 3 = \boxed{}$

$9 + 4 = \boxed{}$

$9 + 5 = \boxed{}$

$9 + 6 = \boxed{}$

$9 + 7 = \boxed{}$

$9 + 8 = \boxed{}$

$9 + 9 = \boxed{}$

$9 + 10 = \boxed{}$

Practice Time

Match the addition with its sum.

13

16

15

28

$8 + 8$

$7 + 6$

$10 + 18$

$7 + 8$

Some addition are given below. Match the pairs of additions that give the same sum.

$8 + 6$

$5 + 5$

$10 + 2$

$9 + 5$

$3 + 7$

$9 + 8$



$6 + 7$

$4 + 8$

$11 + 6$

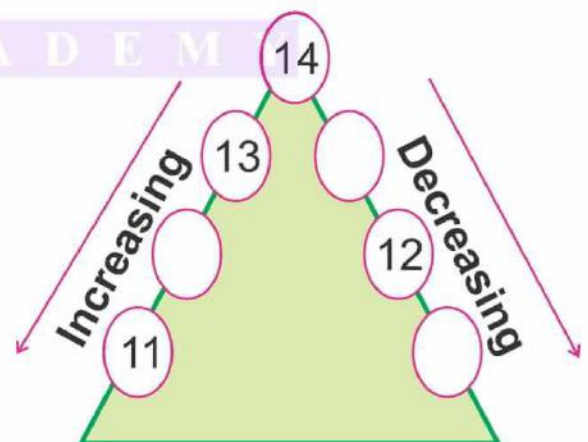
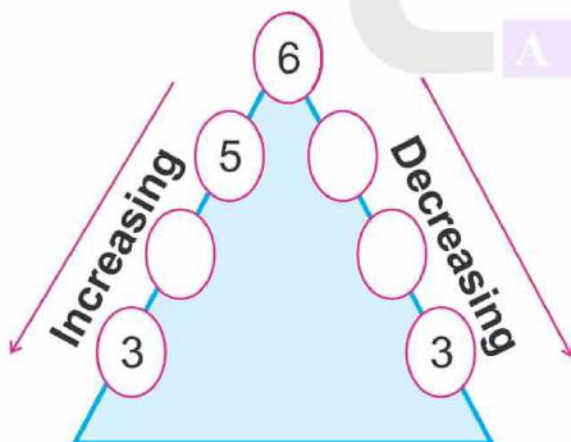
$9 + 4$

5. Increasing-Decreasing



Practice Time

A. Fill in the numbers in their marked order.



B. Fill in the blanks in the increasing order.

45 52

49 56

63 70

69 76

55 62

67 74

78 85

83 90

91 98

86 93

72 79

C. Fill in the blanks in the decreasing order.

65 58

72 65

60 53

78 71

87 80

94 87

82 75

59 52

98 91

75 68

90 83

6. Before and After

1	2	3
1 is before 2.		
2 is before 3.		

4	5	6
5 is after 4.		
6 is after 5.		

Practice Time

A. What comes before?

	3
	8

	4
	9

	5
	7

B. What comes after?

6	
8	

3	
6	

5	
9	

7. In Between

4 5 6

5 is in **between** 4 and 6.

7 8 9

8 is in **between** 7 and 9.



Practice Time

What comes in between?

4

6

1

3

7

9

5

7

3

5

6

8

2

4

8

10