
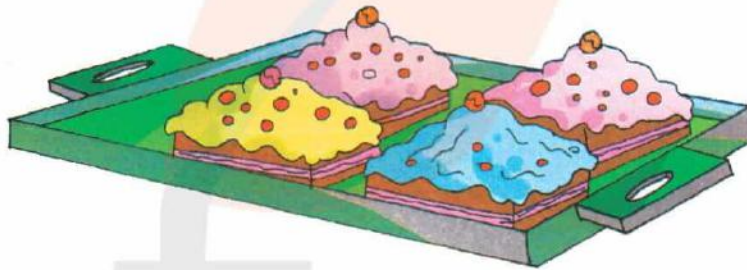


10. Addition

There are **2 pastries** in the tray.



Now, we keep **2 more pastries** in the same tray.



Now, there are **4 pastries** in the tray.

i.e., $2 + 2 = 4$

We say that 2 pastries plus 2 pastries make 4 pastries.

We speak as **2 plus 2 is equal to 4.**

We use '+' for addition.
We use '=' to show
the answer.



Addition



and



equal to



1

+

2

=

3

We add 1 and 2, which is equal to 3.

We write, $1 + 2 = 3$



and



equal to



1

+


1

=

2

We add 1 and 1, which is equal to 2.

We write, $1 + 1 = 2$



and



equal to



2

+

3

=




5

We add 2 and 3, which is equal to 5.

We write, $2 + 3 = 5$




Practice Time

Count the given objects and fill the boxes :

 <input type="text"/>	+	 <input type="text"/>	equal to	 <input type="text"/>
---	---	---	----------	---

 <input type="text"/>	+	 <input type="text"/>	equal to	 <input type="text"/>
---	---	---	----------	--

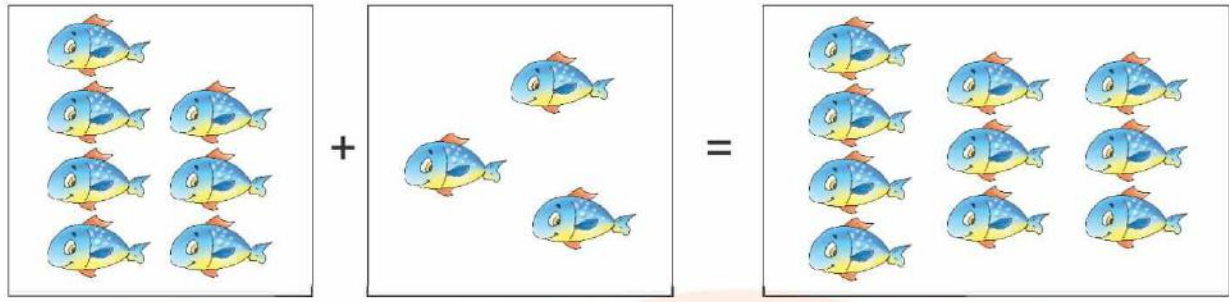
 <input type="text"/>	+	 <input type="text"/>	equal to	 <input type="text"/>
--	---	--	----------	--

 <input type="text"/>	+	 <input type="text"/>	equal to	 <input type="text"/>
---	---	---	----------	---

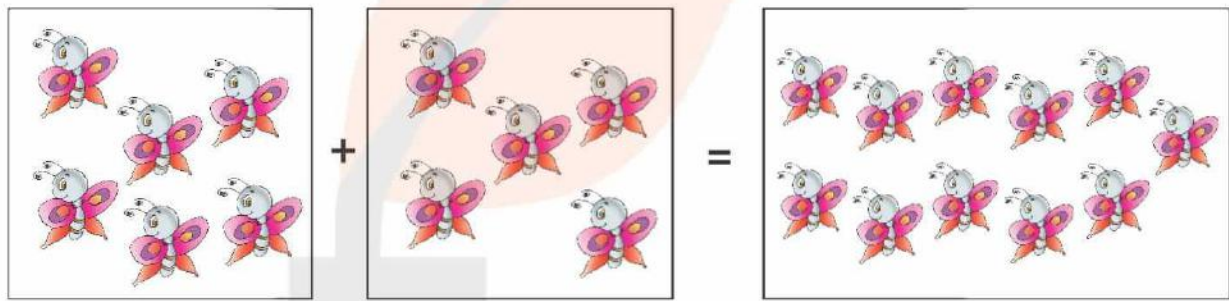
 <input type="text"/>	+	 <input type="text"/>	equal to	 <input type="text"/>
---	---	---	----------	---

Practice Time

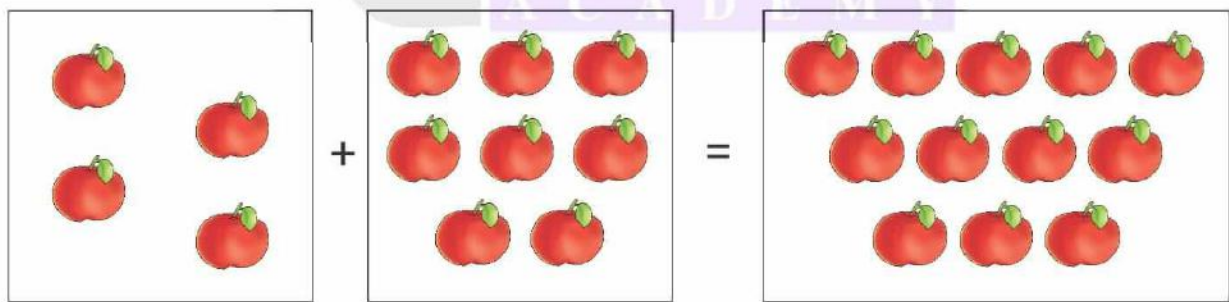
Count the objects and write the number.



+ =





+ =





+ =

Practice Time


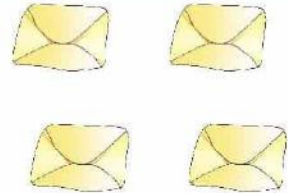
Count the objects and add them. Write the answers in the boxes :

	+		=	<input type="text"/>
---	---	--	---	----------------------

	+		=	<input type="text"/>
---	---	--	---	----------------------

	+		=	<input type="text"/>
--	---	---	---	----------------------

	+		=	<input type="text"/>
---	---	--	---	----------------------

	+		=	<input type="text"/>
---	---	--	---	----------------------

11. Addition with Lines (Type-A)

Let us add by drawing lines :

2		→ draw 2 lines for 2
+ 3		→ draw 3 lines for 3
5	→ count all the lines and write the answer.	

2		→ draw 2 lines for 2
+ 5		→ draw 5 lines for 5
7	→ count all the lines and write the answer.	

5		→ draw 5 lines for 5
+ 3		→ draw 3 lines for 3
8	→ count all the lines and write the answer.	

4		→ draw 4 lines for 4
+ 4		→ draw 4 lines for 4
8	→ count all the lines and write the answer.	

Practice Time

Add the following by drawing lines :

$$\begin{array}{r} 2 \\ + 3 \\ \hline 5 \end{array}$$

$$\begin{array}{r} 6 \\ + 2 \\ \hline \end{array}$$

$$\begin{array}{r} 3 \\ + 2 \\ \hline \end{array}$$

$$\begin{array}{r} 4 \\ + 4 \\ \hline \end{array}$$

$$\begin{array}{r} 5 \\ + 1 \\ \hline \end{array}$$

$$\begin{array}{r} 7 \\ + 2 \\ \hline \end{array}$$

$$\begin{array}{r} 3 \\ + 1 \\ \hline \end{array}$$

$$\begin{array}{r} 6 \\ + 3 \\ \hline \end{array}$$

$$\begin{array}{r} 1 \\ + 5 \\ \hline \end{array}$$

$$\begin{array}{r} 2 \\ + 3 \\ \hline \end{array}$$

$$\begin{array}{r} 4 \\ + 3 \\ \hline \end{array}$$

$$\begin{array}{r} 3 \\ + 3 \\ \hline \end{array}$$

$$\begin{array}{r} 5 \\ + 3 \\ \hline \end{array}$$

$$\begin{array}{r} 3 \\ + 4 \\ \hline \end{array}$$

$$\begin{array}{r} 6 \\ + 1 \\ \hline \end{array}$$