

Mathematics

(www.tiwariacademy.net)

(Chapter – 1) (Number Systems)(Exemplar Problems)

(Class – IX)

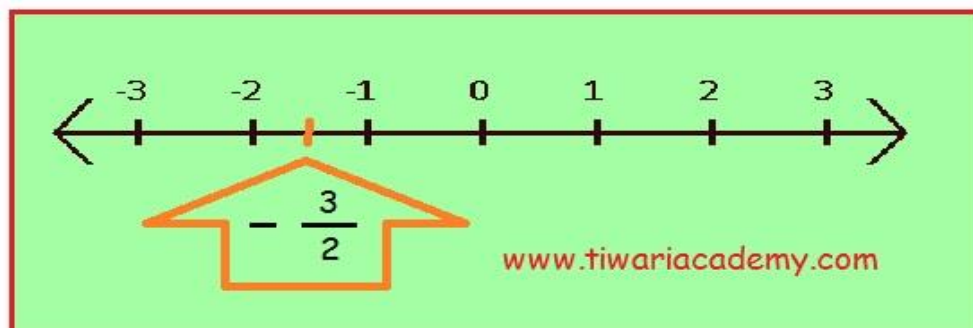
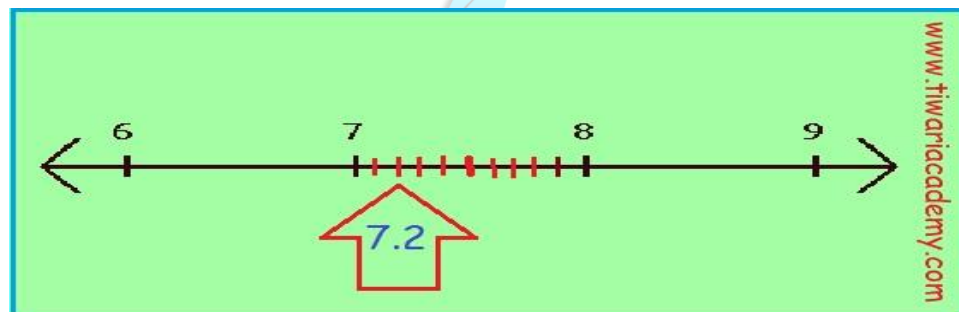
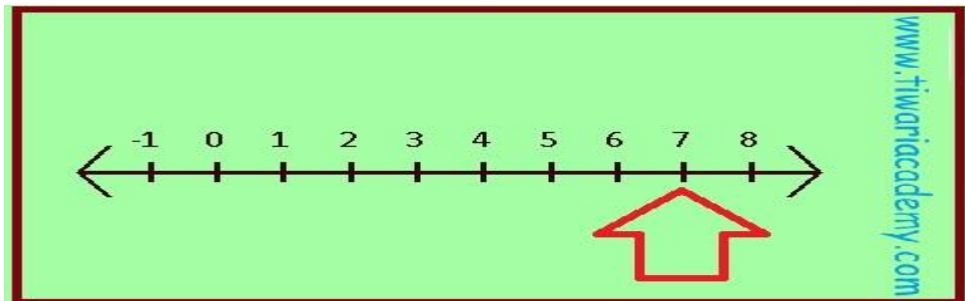
Exercise 1.3

Question 4:

Represent the following numbers on the number line:

$$7, 7.2, \frac{-3}{2}, \frac{-12}{5}$$

 Answer 4:



Mathematics

(www.tiwariacademy.net)

(Chapter – 1) (Number Systems)(Exemplar Problems)

(Class – IX)

